




**Qu 1. Draw or glue a picture of:**

**(a) A river**

**(b) A hill**

**(c) A mountain**




**Qu 2. Compare the two pictures below:**

**PICTURE 1**

**PICTURE 2**



**HILL**



**Now answer the following questions:**

**(a) Can we say that these two natural features are similar?**

\_\_\_\_\_

**(b) Why?**

\_\_\_\_\_

**(c) Which one of these two can we climb easily?**

\_\_\_\_\_


**(d) Name the mountain found in your locality.**

\_\_\_\_\_

**Qu 3. Study the picture carefully then,**

Fill in the blanks with the words given below.

river mouth waterfall source



Now complete the sentences below with the given words:

mouth

mountains

Grand River South East

source

- (a) A river flows from the \_\_\_\_\_ and highland to lowland.
- (b) The place where a river starts is known as its \_\_\_\_\_.
- (c) The place where a river enters the sea is known as its \_\_\_\_\_.
- (d) The longest river in Mauritius is \_\_\_\_\_.